

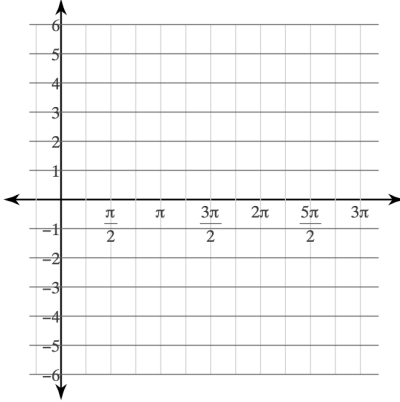
Name: _____

Class: _____

Unit Assessment 7 Group
CALCULATORS ALLOWED

Graph the following functions. Identify the period and amplitude of each function.

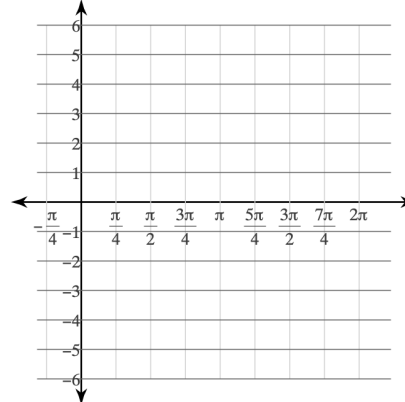
1) $y = 2\cos \theta - 1$



Amplitude:

Period:

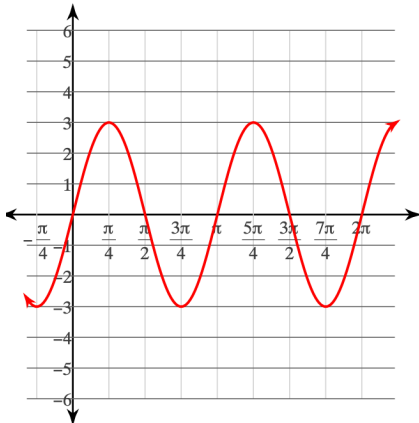
2) $y = \sin 4\theta$



Amplitude:

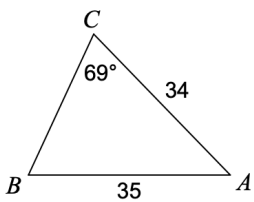
Period:

3) Write an equation for the following graph:

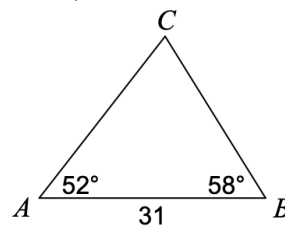


Find each measurement indicated:

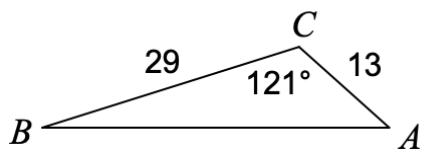
4) $m\angle B$



5) AC



6) Find AB



7) $m\angle B$

